








Week 6 Prompt

| | | |
|---|---|---|
| <p>What happens when you refract light?</p> | <p>Date: _____ Temperature: _____ Daylight Hours: _____</p> | <p>Phase of the Moon </p> |
| <p>What happens when you refract light?</p> | <p>Date: _____ Temperature: _____ Daylight Hours: _____</p> | <p>Phase of the Moon </p> |
| <p>What happens when you refract light?</p> | <p>Date: _____ Temperature: _____ Daylight Hours: _____</p> | <p>Phase of the Moon </p> |
| <p>What happens when you refract light?</p> | <p>Date: _____ Temperature: _____ Daylight Hours: _____</p> | <p>Phase of the Moon </p> |
| <p>What happens when you refract light?</p> | <p>Date: _____ Temperature: _____ Daylight Hours: _____</p> | <p>Phase of the Moon </p> |
| <p>What happens when you refract light?</p> | <p>Date: _____ Temperature: _____ Daylight Hours: _____</p> | <p>Phase of the Moon </p> |
| <p>What happens when you refract light?</p> | <p>Date: _____ Temperature: _____ Daylight Hours: _____</p> | <p>Phase of the Moon </p> |